

# Division Drawing: Bugs!


Answer the following division problems, then use your answers to complete the pictures of the bugs below.

---

Draw

$$10 \div 5$$

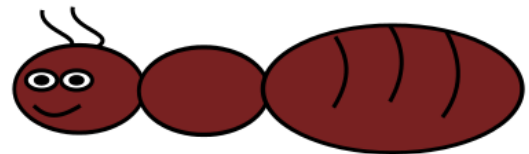
wings on the fly



Draw

$$24 \div 4$$

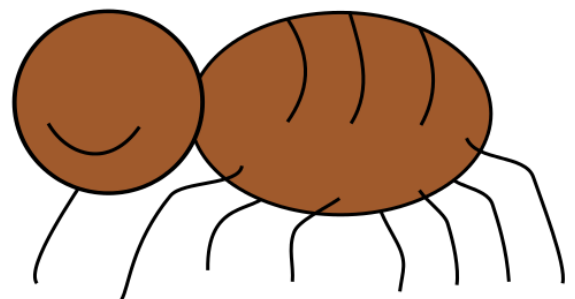
legs on the ant



Draw

$$16 \div 2$$

eyes on the spider



Draw

$$33 \div 3$$

segments on the centipede

